

# 9.5 Analyzing Graphs


**Essential Question** How can you analyze a function from its graph?

## 1 ACTIVITY: Analyzing Graphs

Work with a partner. Copy and complete the table for the given situation. Then make a graph of the data. Write an equation for the function. Describe the characteristics of the graph.

- a. Find the area of a square with side length  $s$ .


Side, $s$	1	2	3	4
Area, $A$				



Side,  $s$

- b. Find the amount earned for working  $h$  hours at \$3 per hour.


Hour, $h$	1	2	3	4
Amount, $A$				



Hour,  $h$

- c. You start with \$20 in a savings account. Find the amount left in the account when you withdraw \$2 each day  $d$ .


Day, $d$	1	2	3	4
Amount, $A$				



Day,  $d$


- d. You start with \$10 in a savings account. Find the amount in the account when you deposit \$2 each day  $d$ .

Day, $d$	1	2	3	4
Amount, $A$				



Day,  $d$

## 2 ACTIVITY: Conducting an Experiment



Work with a partner.

### Collect Materials:

- A board at least 8 feet long
- Five books of the same thickness
- Toy car
- Stopwatch

### Perform the Experiment:

- Place one book underneath one end of the board.
- Put the car at the top of the ramp. Measure the time (in seconds) it takes the car to roll down the ramp.
- Record your result in a table.
- Repeat the experiment with two, three, and four books.

### Analyze the Results:

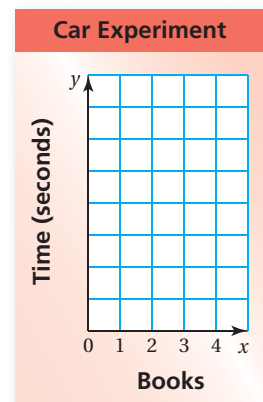
- Make a graph of your data.
- Does the graph have the characteristics of any of the graphs in Activity 1? Explain.

### Use Your Results to Predict:

- Use your graph to predict how long it will take the car to roll down the ramp when five books are placed under the board.

### Test Your Prediction:

- Repeat the experiment with five books. How close was your prediction?



## What Is Your Answer?

3. **IN YOUR OWN WORDS** How can you analyze a function from its graph? Give a real-life example of how a graph can help you make a decision.

### Practice

Use what you learned about analyzing graphs to complete Exercises 3 and 4 on page 396.

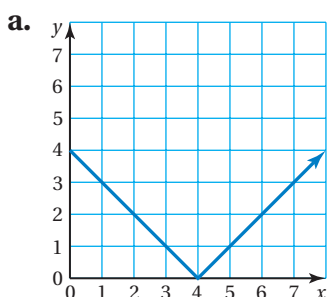
A function whose graph is a straight line is a **linear function**.

## EXAMPLE 1 Identifying Linear Functions

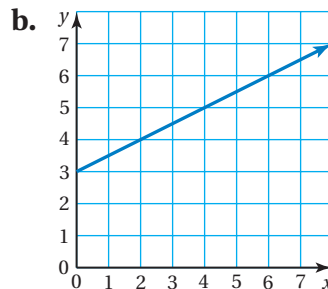
### Key Vocabulary

linear function,  
p. 394

Does the graph represent a linear function? Explain.



❖ The graph is not a straight line. So, the graph does *not* represent a linear function.



❖ The graph is a straight line. So, the graph does represent a linear function.

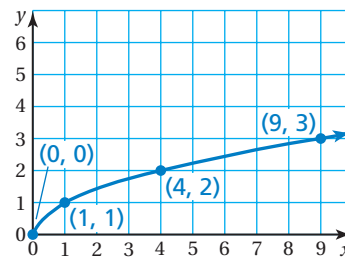
## EXAMPLE 2 Identifying a Linear Function

Input, $x$	Output, $y$
0	0
1	1
4	2
9	3

Does the input-output table represent a linear function? Explain.

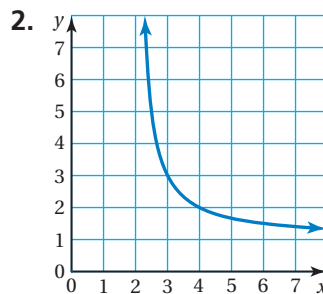
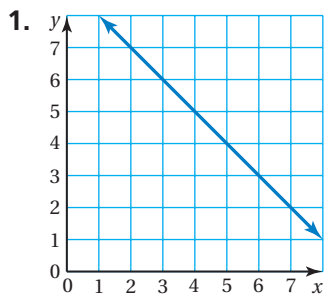
The ordered pairs in the table are  $(0, 0)$ ,  $(1, 1)$ ,  $(4, 2)$ , and  $(9, 3)$ . Plot the ordered pairs and draw a graph through the points.

❖ The graph is not a straight line. So, the function is *not* linear.



### On Your Own

Does the graph or table represent a linear function? Explain.



3. 

Input, $x$	0	3	6	8
Output, $y$	1	4	7	9

4. 

Input, $x$	0	1	2	3
Output, $y$	1	2	5	10

Now You're Ready  
Exercises 5–14

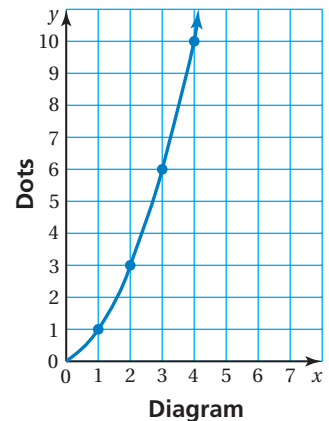
### EXAMPLE 3 Identifying a Linear Function

Is the function relating the diagram number  $x$  to the number of dots  $y$  linear?



Make an input-output table. Then graph the ordered pairs and draw the graph.

Diagram, $x$	Dots, $y$	$(x, y)$
1	1	(1, 1)
2	3	(2, 3)
3	6	(3, 6)
4	10	(4, 10)

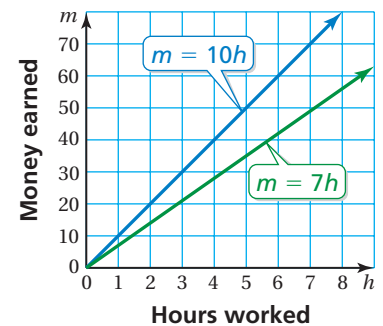


∴ The graph is not a straight line. So, the function is *not* linear.

### EXAMPLE 4 Comparing Linear Functions

Your sister earns \$10 per hour.  
Your brother earns \$7 per hour.

The functions  $m = 10h$  and  $m = 7h$  show the relationship between the numbers of hours  $h$  they work and the money  $m$  they earn. Which graph is steeper? Explain.

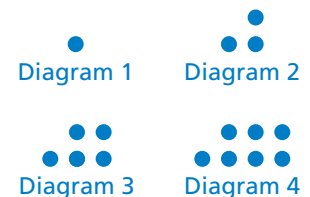


∴ The graph of  $m = 10h$  is steeper. The reason it is steeper is that your sister's hourly rate is greater than your brother's hourly rate.

### On Your Own

Now You're Ready  
Exercises 15–19

5. Make an input-output table for the pattern. Is the function relating the diagram number  $x$  to the number of dots  $y$  linear? Explain.




6. The functions  $d = 65t$  and  $d = 55t$  show the relationship between the distances  $d$  (in miles) traveled and the times  $t$  (in hours) for two cars. Graph the functions. Which graph is steeper? Explain.



## Vocabulary and Concept Check

- VOCABULARY** Why are some functions called *linear functions*?
- WRITING** How can you decide whether or not an input-output table represents a linear function?



## Practice and Problem Solving

Copy and complete the table. Then make a graph of the data. Write an equation for the function.

3. Find the diameter of a circle with radius  $r$ .

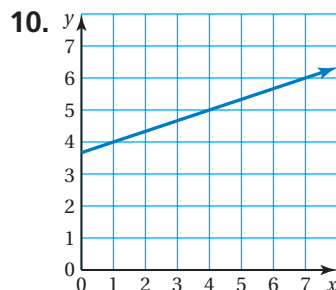
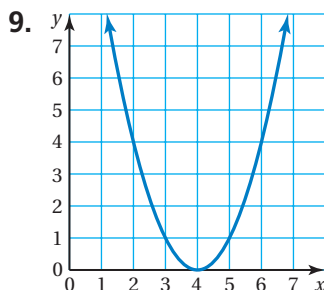
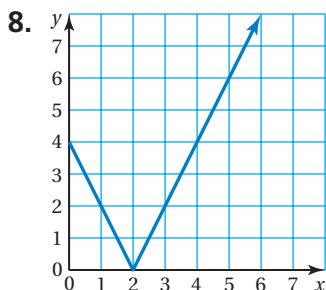
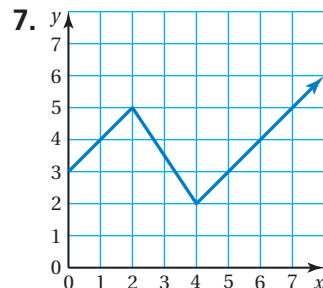
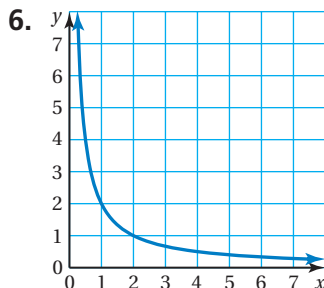
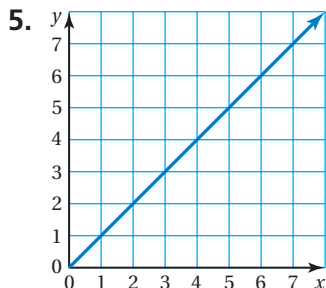
Radius, $r$	1	2	3	4
Diameter, $d$				

4. Find the cost of renting roller blades for  $h$  hours at \$6 per hour.

Hours, $h$	1	2	3	4
Cost, $c$				

Does the graph represent a linear function? Explain.

1



Does the input-output table represent a linear function? Explain.

2

11. 

Input, $x$	1	2	3	4
Output, $y$	1	3	5	7

12. 

Input, $x$	0	2	4	6
Output, $y$	10	9	8	7

13. 

Input, $x$	1	4	7	10
Output, $y$	5	2	2	5

14. 

Input, $x$	3	4	5	6
Output, $y$	5	8	9	8

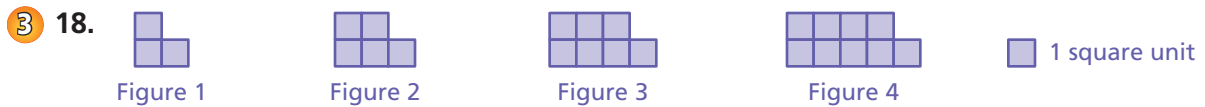
Graph each linear function. Which graph is steeper? Explain.

4 15.  $y = 5x$  and  $y = \frac{1}{5}x$

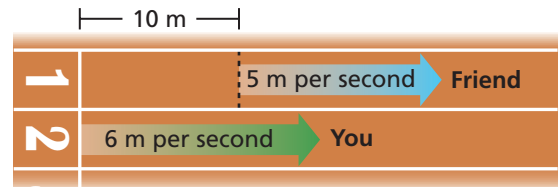
16.  $y = \frac{4}{5}x$  and  $y = \frac{3}{5}x$

17.  $y = x$  and  $y = 2x + 1$

Make an input-output table for the pattern. Is the function relating the figure number  $x$  to the area  $y$  linear? Explain.

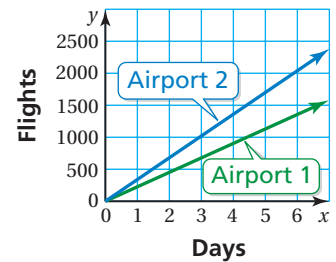


20. **FOOTRACE** In a 100-meter race, you give your friend a head start. Your speeds are shown.



- Write a function that represents your distance  $d$  after  $t$  seconds.
- Write a function that represents your friend's distance  $d$  after  $t$  seconds.
- Graph your distance and your friend's distance in the same coordinate plane.
- What does the intersection of the two graphs represent?

21. **AIRPORT USE** The graph shows the numbers of flights that arrive at and depart from two regional airports. Which airport has more flights in a day? How many more? Explain.

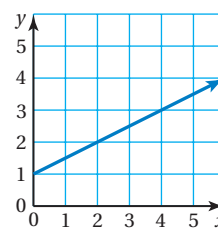


22. **Reasoning** Use the graph.

- Copy and complete the table. Then find the differences.

<b>x</b>	0	1	2	3	4	5
<b>y</b>	1	1.5	2	2.5		

Differences: 0.5 0.5 ? ? ?



- Graph other lines and find the "differences." Describe a property suggested by your results.



## Fair Game Review what you learned in previous grades & lessons

Tell which number is greater. (Section 4.3)

23. 40%,  $\frac{11}{25}$

24. 0.27, 2.8%

25.  $\frac{4}{5}$ , 0.802

26.  $\frac{33}{50}$ ,  $66\frac{2}{3}\%$

27. **MULTIPLE CHOICE** For which inequality is  $x = 7$  a solution? (Section 8.1)

(A)  $x < 7$

(B)  $x + 4 \geq 12$

(C)  $21 \leq 3x$

(D)  $4x - 5 > 23$